



WORK SHEET-1

Question & Answers

Answer the following questions.

½ Mark Questions

1. Consider the following statements.
 - i. Silent spring written by Rachel Carson.
 - ii. The main theme of Silent Spring is impacts of DDT on birds and human beings.Which of the above statement is correct?
A. (i) Only B. (ii) only C. Both (i) and (ii) D. None of the these
2. Based on the relationship between the information in the first pair, complete the second pair.
Jalasinthi : Jhabua district (Madhya Pradesh) :: Zaheerabad: ?
3. Expand CNG.
4. Expand DDT.
5. Based on the relationship between the information in the first pair, complete the second pair.
Narmada Bachavo Andolan : Madhya Pradesh :: Chipco Movement : ?
6. Based on the relationship between the information in the first pair, complete the second pair.
Massi warrior : Kenya :: Qiang tribes : ?
7. What is “Before They Pass Away”?
8. Which is the first complete organic state?
9. Who was the leader of NBA in Madhya Pradesh?
10. Arrange the following states based on its location from North to South.
Madhya Pradesh, Sikkim, Telangana, Kerala

1 Mark Questions

11. Define Environment sink function.
12. Define sustainable development?
13. Define Environment source function.
14. Why do you think modern method of lofting water has proved to be unstable?
15. Write about article 21 in our constitution.



www.digitalsocialteacher.in

WORK SHEET-2

Question & Answers

Answer the following questions.

2 Mark Questions

11. Why the people of Jalasindhi village refuse to move out of the village?
12. Why do you think the effect of climate change may be felt by all countries?

4 Mark Questions

13. Give suggestions to protect environment.
14. Identify at least ten food items that you consume and find out how far they have travelled from their place of production to reach your plate.

| S.No | Food item | Distance traveled |
|------|-------------|-------------------|
| a | Rice | |
| b | Cooking oil | |
| c | Bananas | |



www.digitalsocialteacher.in

WORK SHEET-3

Map Pointing

1. Point out the following points in India map.



1. Uttarakhand
2. Madhya Pradesh
3. The first state in India which practiced complete organic farming (Sikkim).
4. Gujarat
5. Telangana
6. Jhalasindhi
7. Kerala




www.digitalsocialteacher.in

WORK SHEET-3

Information Skill

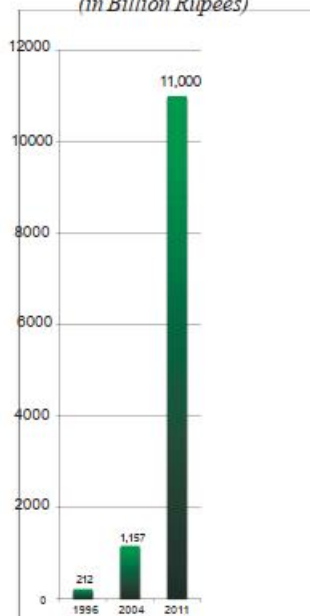
2. Read the following Pyramid Graph and comment on it.



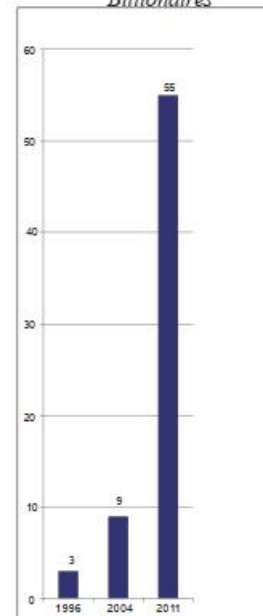
3. Read the following bar graph and answer the below questions.

- i. These bar graphs show which aspects?
- ii. What is the trend of total wealth held by Billionaires?
- iii. Compare the aspects in these two bar graphs.

Graph 2 : Total Wealth held by Billionaires (in Billion Rupees)



Graph 3 : Increase in the Number of Billionaires





Sustainable Development with Equity

WORK SHEET-3

Information Skill

4. Write suitable caption for the following picture.



4. Observe the following picture and write about it in two sentences.





www.digitalsocialteacher.in

Sustainable Development with Equity

CHAPTER
12

WORK SHEET-3

Information Skill

5. Draw a bar graph based on the following table and comment on it related to sustainable development.

| Growth in Extraction of Some key Minerals in India (in thousand tonnes) | | |
|--|--------|--------|
| | 1997-8 | 2008-9 |
| Bauxite | 6108 | 15250 |
| Coal | 297000 | 493000 |
| Iron Ore | 75723 | 225544 |
| Chromite | 1515 | 3976 |

6. Observe the following picture and write a caption related to development.

